











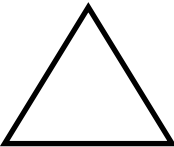

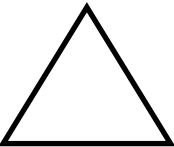

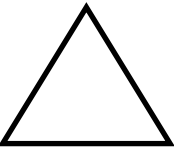
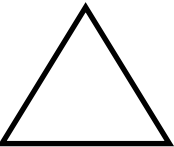



















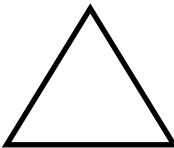


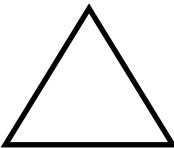
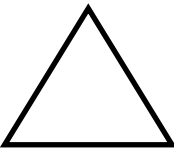










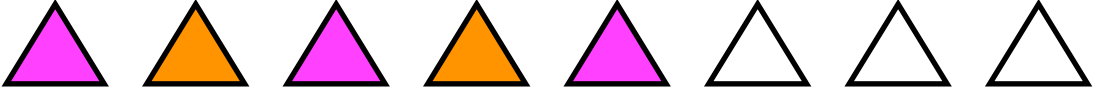

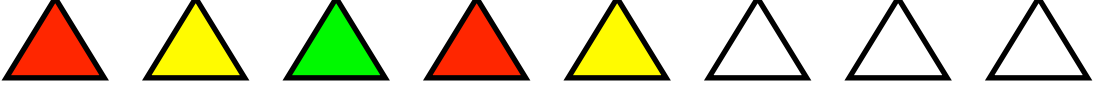



Patterns

Can you finish these patterns?

1						
2						
3						
4						
5						
6						
7						
8						








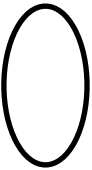

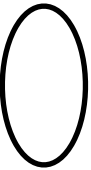

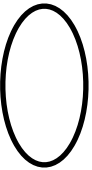




































Patterns

Can you finish these patterns?

1	
2	
3	
4	
5	
6	
7	
8	





































Patterns

Can you continue these patterns?

1	     		
2	     		
3	     		
4	     		
5	     		
6	     		
7	     		
8	     		

Patterns

Can you finish these patterns?

1	   		
2	   		
3	   		
4	   		
5	   		
6	    		
7	    		
8	     		

Patterns

Can you finish these patterns?

1	1	2	1	2	1	2	_____	_____
2	2	5	2	5	2	5	_____	_____
3	1	2	3	1	2	3	_____	_____
4	5	7	4	5	7	4	_____	_____
5	1	0	0	1	0	0	_____	_____
6	5	6	2	5	6	2	_____	_____
7	3	9	4	2	3	9	_____	_____
8	5	3	1	5	5	3	_____	_____

1	2	3	4	5	6	7	8	9	10
---	---	---	---	---	---	---	---	---	----

1		3		5		7		9	
---	--	---	--	---	--	---	--	---	--

	2		4		6		8		10
--	---	--	---	--	---	--	---	--	----

1			4	5		7			10
---	--	--	---	---	--	---	--	--	----

--	--	--	--	--	--	--	--	--	--

1	2	3	4	5	6	7	8	9	10
---	---	---	---	---	---	---	---	---	----

1	2	3	4	5	6	7	8	9	10
---	---	---	---	---	---	---	---	---	----

1	2	3	4	5	6	7	8	9	10
---	---	---	---	---	---	---	---	---	----

1	2	3	4	5	6	7	8	9	10
---	---	---	---	---	---	---	---	---	----

1	2	3	4	5	6	7	8	9	10
---	---	---	---	---	---	---	---	---	----

1	2	3	4	5	6	7	8	9	10	11	12	13	14	15	16	17	18	19	20
---	---	---	---	---	---	---	---	---	----	----	----	----	----	----	----	----	----	----	----

1		3		5		7		9		11		13		15		17		19	
---	--	---	--	---	--	---	--	---	--	----	--	----	--	----	--	----	--	----	--

	2		4		6		8		10		12		14		16		18		20
--	---	--	---	--	---	--	---	--	----	--	----	--	----	--	----	--	----	--	----

		3	4		6	7			10		12	13			16		18		20
--	--	---	---	--	---	---	--	--	----	--	----	----	--	--	----	--	----	--	----

	2					7					12					17			
--	---	--	--	--	--	---	--	--	--	--	----	--	--	--	--	----	--	--	--

--	--	--	--	--	--	--	--	--	--	--	--	--	--	--	--	--	--	--	--

1	2	3	4	5	6	7	8	9	10	11	12	13	14	15	16	17	18	19	20
---	---	---	---	---	---	---	---	---	----	----	----	----	----	----	----	----	----	----	----

1	2	3	4	5	6	7	8	9	10	11	12	13	14	15	16	17	18	19	20
---	---	---	---	---	---	---	---	---	----	----	----	----	----	----	----	----	----	----	----

1	2	3	4	5	6	7	8	9	10	11	12	13	14	15	16	17	18	19	20
---	---	---	---	---	---	---	---	---	----	----	----	----	----	----	----	----	----	----	----

1	2	3	4	5	6	7	8	9	10	11	12	13	14	15	16	17	18	19	20
---	---	---	---	---	---	---	---	---	----	----	----	----	----	----	----	----	----	----	----

1	2	3	4	5	6	7	8	9	10	11	12	13	14	15	16	17	18	19	20
---	---	---	---	---	---	---	---	---	----	----	----	----	----	----	----	----	----	----	----

1	2	3	4	5	6	7	8	9	10	11	12	13	14	15	16	17	18	19	20
---	---	---	---	---	---	---	---	---	----	----	----	----	----	----	----	----	----	----	----

Star Number



Draw it...

Write it...

**The number
before is...**

**The number
after is...**

Star Number



Draw it...

Write it...

**The number
before is...**

**The number
after is...**

Star Number



Draw it...

Write it...

**The number
before is...**

**The number
after is...**

Star Number



Draw it...

Write it...

**The number
before is...**

**The number
after is...**

Star Number



Draw it...

Write it...

**The number
before is...**

**The number
after is...**

Star Number



Draw it...

Write it...

**The number
before is...**

**The number
after is...**

Star Number



Draw it...

Write it...

**The number
before is...**

**The number
after is...**

Star Number



Draw it...

Write it...

**The number
before is...**

**The number
after is...**

Star Number



Draw it...

Write it...

**The number
before is...**

**The number
after is...**

Star Number



Draw it...

Write it...

**The number
before is...**

**The number
after is...**

Star Number



Draw it...

Write it...

**The number
before is...**

**The number
after is...**

Star Number



Draw it...

Write it...

**The number
before is...**

**The number
after is...**

Star Number



Draw it...

Write it...

**The number
before is...**

**The number
after is...**

Star Number



Draw it...

Write it...

**The number
before is...**

**The number
after is...**

Star Number



Draw it...

Write it...

**The number
before is...**

**The number
after is...**

Star Number



Draw it...

Write it...

**The number
before is...**

**The number
after is...**

Star Number



Draw it...

Write it...

**The number
before is...**

**The number
after is...**

Star Number



Draw it...

Write it...

**The number
before is...**

**The number
after is...**

Star Number



Draw it...

Write it...

**The number
before is...**

**The number
after is...**

Star Number




Draw it...


Write it...

**The number
before is...**


**The number
after is...**




$$\square + \square = \square$$




$$\square + \square = \square$$




$$\square + \square = \square$$




$$\square + \square = \square$$




$$\square + \square = \square$$



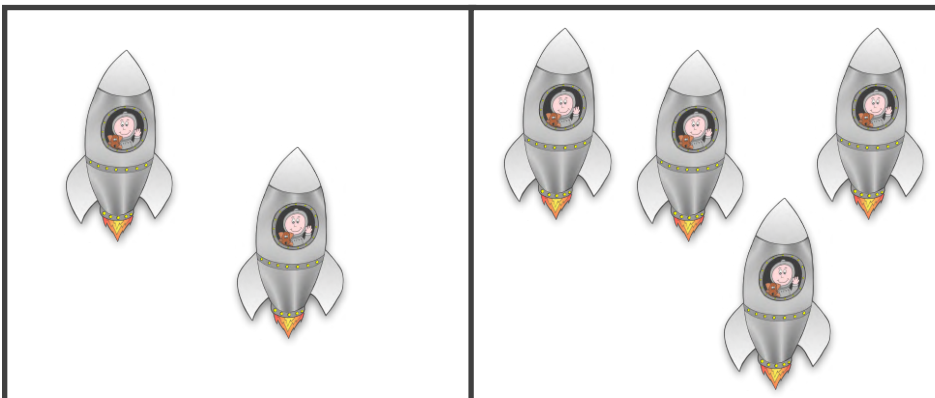
$$\square + \square = \square$$




$$\square + \square = \square$$




$$\square + \square = \square$$




$$\square + \square = \square$$





$$\square + \square = \square$$





$$\square + \square = \square$$





$$\square + \square = \square$$




$$\square + \square = \square$$




$$\square + \square = \square$$




$$\square + \square = \square$$




$$\square + \square = \square$$




$$\square + \square = \square$$




$$\square + \square = \square$$




$$\square + \square = \square$$




$$\square + \square = \square$$




$$\square + \square = \square$$




$$\square + \square = \square$$




$$\square + \square = \square$$




$$\square + \square = \square$$




$$\square + \square = \square$$



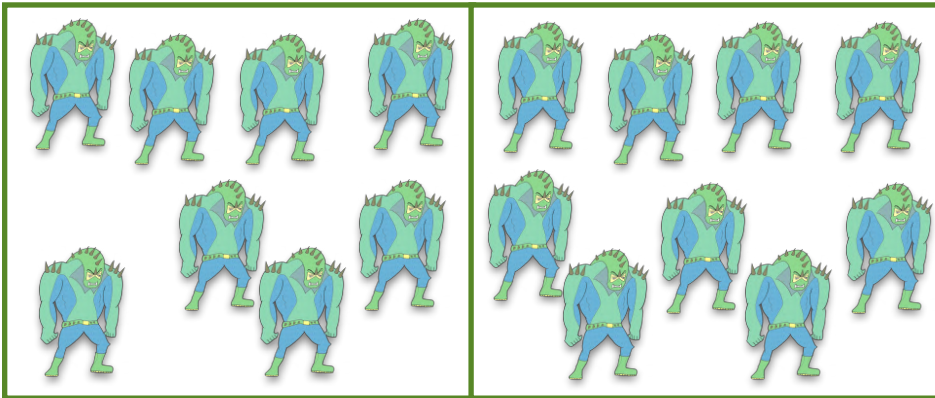
$$\square + \square = \square$$




$$\square + \square = \square$$



$$\square + \square = \square$$



$$\square + \square = \square$$



$$\square + \square = \square$$