

# P2 Home Learning

Monday 18<sup>th</sup> January 2021

## Literacy:

### Spelling/ Handwriting

Write each of your spelling words 5 times using Rainbow writing. Once you have finished, sound out each word and have a go at spelling aloud.

Spelling Selection

#### Rainbow Words

Write your words out in pencil. Next, draw around each letter 5 more times using a different coloured pencil.



For example



### Word list:

in, as, have, are, from, they, to, on

## Writing :

'Weekend News' - Watch my direct teaching lesson on Seesaw.

Write a few sentences about your weekend. Remember to use full stops and capital letters for each sentence. If you can, write more than one sentence and have a go at using either the connective 'and' or 'but' to make one of your sentences more interesting.

For example: At the weekend I played scrabble **and** read my new book. I was feeling relaxed.

After you have finished writing, draw a picture of something you have written about.

Send me your wonderful news on Seesaw or email to me at

[gw19devinelynnne@glow.ea.glasgow.sch.uk](mailto:gw19devinelynnne@glow.ea.glasgow.sch.uk)

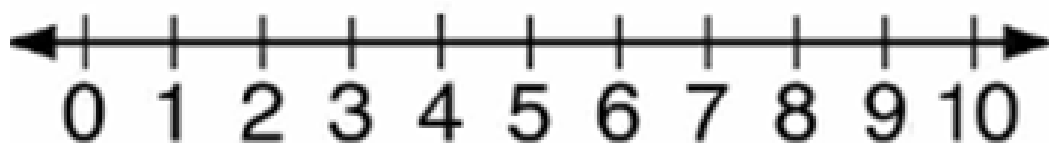
## **Numeracy: Rounding to the nearest 10**

Watch my direct teaching lesson on SeeSaw.

Today we are looking at rounding to the nearest 10. To do this we can use a number line to help us.

Is this number  
nearer 0 or 10?

Is this number  
nearer 0 or 10?



One of the main rules for rounding to the nearest 10 is when a number ends in 1, 2, 3, 4 it rounds down because it is nearer to that ten and when it ends in 5, 6, 7, 8 or 9 it rounds up. So for example:

**4 rounded to the nearest 10 is 0**


**5 rounded to the nearest 10 is 10**

**11 rounded to the nearest 10 is 10**

**15 rounded to the nearest 10 is 20**

# Activity 1

Use the number line to tell whether a number is nearest to 10 or 20.



1) 11 is nearest to \_\_\_\_\_

2) 16 is nearest to \_\_\_\_\_

3) 15 is nearest to \_\_\_\_\_

4) 18 is nearest to \_\_\_\_\_

5) 12 is nearest to \_\_\_\_\_

6) 10 is nearest to \_\_\_\_\_

7) 13 is nearest to \_\_\_\_\_

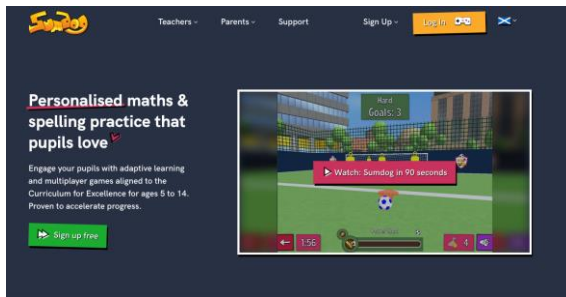
8) 14 is nearest to \_\_\_\_\_

## Activity 2

Play a game of rocket rounding

<https://www.topmarks.co.uk/maths-games/rocket-rounding>

## Activity 3: Sumdog



<https://www.sumdog.com>

Our school has been entered into the Glasgow Sumdog Challenge. This started on Friday 15<sup>th</sup> January. Log in and get our class to the top

of the leader board. 😊

## Health and Wellbeing:

- PE with Joe Wicks  
Kick-start the new year with one of Joe Wicks PE at home sessions. Follow the link below  
<https://www.youtube.com/user/thebodycoach1>
- Mrs Devine's 60 Second Challenge.

### 60 Second Challenge

#### Socks in the Box

Do you keep trying even if you struggle to match up a pair of socks?

#### The Physical Challenge

How many socks can you pair up and put in the box in 60 seconds?

Place unpaired socks 5 steps away from a box. Players run, match up a pair of socks and place them in the box.

**#StayHomeStayActive**



#### Equipment

Socks and a Box!  
If you do not have a box use a bowl.  
Throw in unpaired socks as red herrings.

<b>Achieve Gold</b> 20 pairs of socks	
<b>Achieve Silver</b> 15 pairs of socks	
<b>Achieve Bronze</b> 10 pairs of socks	

# Who will be the Class Champion?

