

P3's Home Learning

Friday 15th January 2021

NOTE:

Remember to upload your work to SeeSaw or email to Mrs Scott at gwl4scottlynn@glow.ea.glasgow.sch.uk. I am online from 9am -3pm to help.

the
difference
between
who you
are and
who you
want to
be is what
you do.

Literacy

Spelling Test: Ask your parent or sibling to test your spelling from your spelling group words below. In your jotter write the date, and number from 1 to 10. Ask them to say it, say a sentence with word in it. Repeat the word again. You write it down.

		
thought head under story saw left don't few while along	name good sentence man think say great where help through	we when your can said

Dictation: Ask your parent/sibling to read out the following sentence and write it down with the correct punctuation and spelling.



I thought of a story in my head while walking along the path.



Can you help me think of a great sentence?



We can help.

Handwriting: Let's improve our handwriting. Let's practise our one armed robot letters.

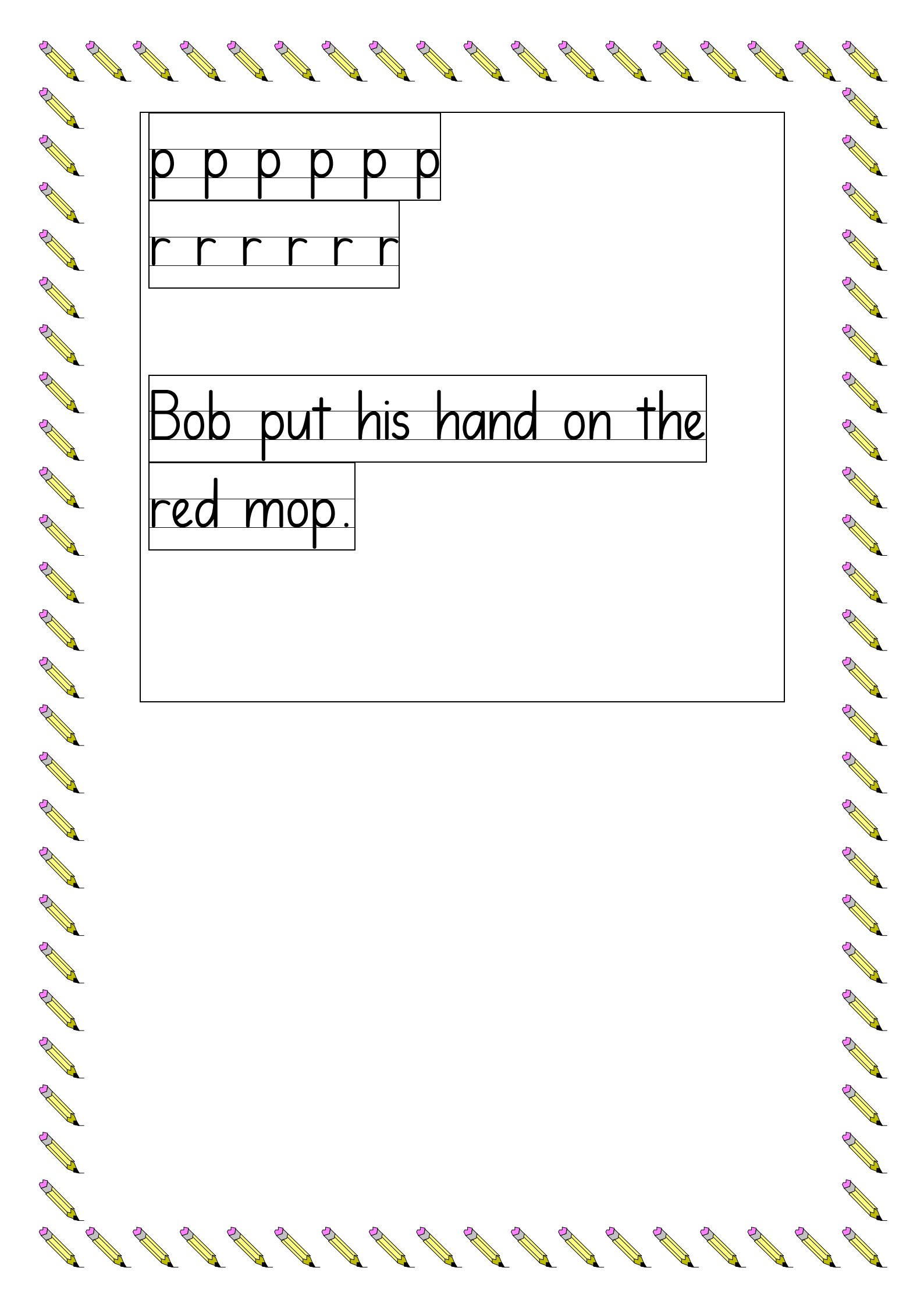
b b b b b b

h h h h h h

k k k k k k

m m m m m m

n n n n n n



p p p p p p

r r r r r r

Bob put his hand on the

red mop.

Numeracy



Glasgow mathematics contest

Let's try and win the Glasgow Sumdog competition! It starts today. It is from Friday 15th January 2021 to Thursday 21st January 2021. We were so close the last time!

Answer 1000 questions as best as you can. Try and do a bit each day. Remember, it's not a race, take your time, answer them accurately and you will score more points for yourself to win a place on the competition leader board and for our class to win! Go for it! You can do it! If anyone can, P3 can.

Coordinates: Battle Ships

Now that you are experts at plotting points. Have fun playing this game with a member of your family or friend. The rules are given below.

My Ships

	1	2	3	4	5	6	7	8	9	10
A										
B										
C										
D										
E										
F										
G										
H										
I										
J										

Enemy Ships

	1	2	3	4	5	6	7	8	9	10
A										
B										
C										
D										
E										
F										
G										
H										
I										
J										

How to play battleship

Print two copies of this page. One for each player.

Plot all of your ships by drawing an outline of each ship on the grid according to its size. (ex: battleship is 4 blocks). Ships may not overlap. Don't let your enemy see your ships!

Take turns firing upon the enemy by calling out plot points (example: A-5). Mark your shots as "hit"(X) or "miss"(dot) on your enemy ships plot according to your enemy's reply.

When your enemy fires upon you, say "hit" or "miss" and mark your hit ships with an X when they are hit. When your ship is sunk, you must say, "You sank my _____!" (Fill in the name of your ship type). The first person to sink all of their enemy's ship wins! Print copies of the next page for more game boards, or draw your own 10x10 grids.

Example:

My Ships

	1	2	3	4	5
A				X	
B				X	
C					
D					



Enemy Ships

	1	2	3	4	5
A		.			
B	.		X	X	.
C			.		.
D					

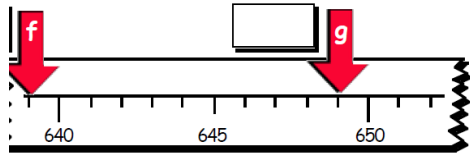
Ships:

- Aircraft carrier (5 blocks)
- Battleship (4 blocks)
- Cruiser (3 blocks)
- Patrol Boat (2 blocks)
- Submarine (3 blocks)

Choose Hot or Mild questions- or both- below.



1. What are the missing numbers?



$$\begin{array}{r} 2. \quad 3 \ 4 \ 3 \\ \quad 2 \ 0 \ 3 \\ + \ 1 \ 5 \ 1 \\ \hline \\ \hline \end{array}$$

$$\begin{array}{r} 3. \quad 3 \ 1 \ 5 \\ - \ 1 \ 6 \ 9 \\ \hline \\ \hline \end{array}$$

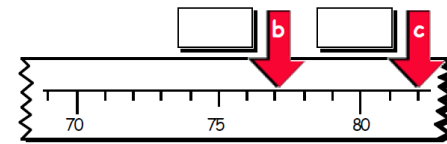
4. How many  in  ?

5. $\pounds 5.08 - \pounds 3.27 =$
(Remember the golden rule to line up the decimal point!)

6. How much?




1. What are the missing numbers?



$$\begin{array}{r} 2. \quad 7 \ 0 \ 3 \\ + \ 8 \ 6 \\ \hline \\ \hline \end{array}$$

$$\begin{array}{r} 3. \quad 8 \ 9 \\ - \ 7 \ 2 \\ \hline \\ \hline \end{array}$$

4. How many 10p are in  ?

5. $\pounds 1.39 - \pounds 0.65 =$
(Remember to line up the decimal point)

6. How much?



7. What day is 4 days before Friday?

7. What month is 5 months before August?

8. Round 345 to the nearest 10.

9. $6 + 7 + 7 =$

10. $125 - 21 =$

8. Round 85 to the nearest 10.

9. $3 + 6 + 7 =$

10. $81 - 7 =$

French Fridays

Continue to learn French at home.

Lingobox Learning puts out a live

YouTube session at 11am every Friday. You can tune in

at:-

<https://www.youtube.com/channel/UCO4YR8hhRveNhvZrz9xptDQ>

