

P3's Home Learning

Monday 1st February 2021

Note:

Microsoft Team catch up at 11am. So good to have so many on! I am super proud of you!

The MORE
that you read,
the MORE things
you will know.
The MORE that you
LEARN,
the MORE places you'll go.



Remember to upload your work to SeeSaw or email to Mrs Scott at gwl4scottlynn@glow.ea.glasgow.sch.uk.

Literacy:

(Watch/listen to my direct teaching point on SeeSaw and then complete this follow up work)

Spelling – Phonics:

- 1) 'oy' – Clever Cookies & Super Stars Y & X – Smarty Pants
- 2) Divide your page into quadrants (4 equal sections)
- 3) Draw a picture in each quadrant for one of your words and write the word OR take a picture of an item in or around your house which has this sound in it.
- 4) Write 4 good sentences using these words with good VCOP.



boy
joy
toy
enjoy
annoy
employ
destroy
loyal
royal
oyster

Y

X

Phonics workbooks will be emailed or
available
for collection.

Weekend News:

Write your about your weekend or whatever news you would like to share along with a nice picture.

Make sure you use a variety of different openers and try to use some connectives as well as some

ambitious vocabulary to make your reader want to keep reading.

Remember to use capital letters and full stops and not to put too much in one sentence. If you can't say it in one breath, break it up!

Use the word mat below to help.



This weekend I went
It was Saturday and I
Yesterday I

What?

played went to
watched swimming
danced ate
sang shopping



Who?

Mum Gran
Dad Grandpa
brother friend
sister cousin
aunt uncle



When?

Monday
Tuesday
Wednesday
Thursday
Friday
Saturday
Sunday

morning
afternoon
night



My News Word Mat



Where?

cinema shops park
party house ice skating
chapel football restaurant



Feelings

happy angry scared
sad bored embarrassed
excited nervous tired

Reading

Your reading books and comprehension will be available to collect from school today. Please ensure you return your existing reading book.

Poem of the Day

We are going to be focusing on poetry this term so let's get Read the following poem.

- Can you identify the words that rhyme?
- Where are the rhyming words?

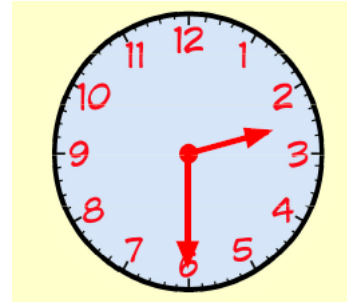
Bed

I think I'll go to bed
And rest my weary head,
But there's a programme on TV
So I'll just watch that instead.

Numeracy: Time: Half Past

(Watch/listen to my direct teaching point on SeeSaw and then complete this follow up work or join MS Teams for this lesson)

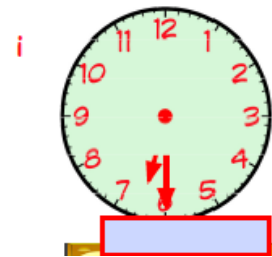
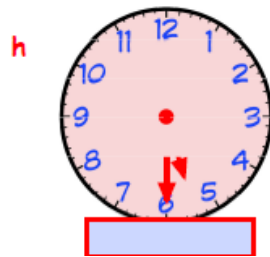
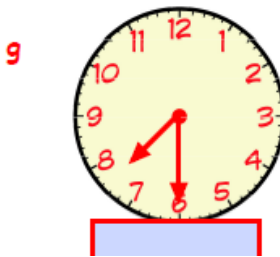
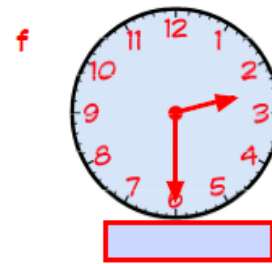
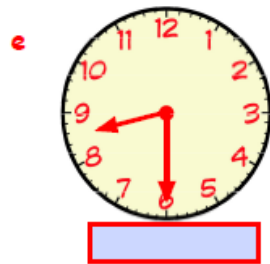
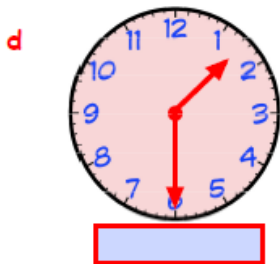
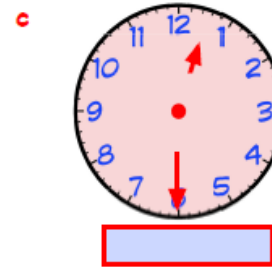
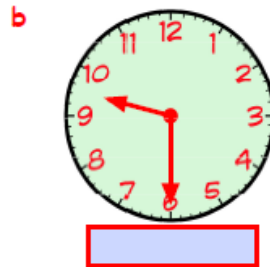
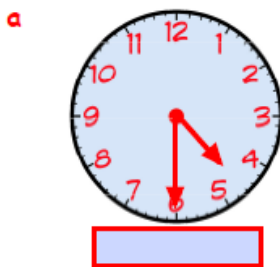
When the **BIG** hand moves half-way around, it is pointing at 6. The time read is **half past** the hour.



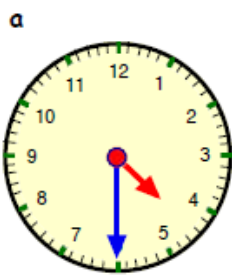
This clock reads **half past 2**.

Notice that the small hand (the hour hand) is half-way between the 2 and 3.

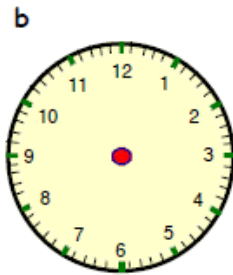
1. How many minutes are there in 1 hour? _____
2. How many minutes are there in half an hour? _____
3. Write the time shown on each clock:-



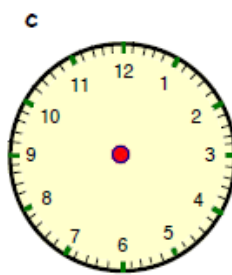
4. Draw the hands on each clock to show the correct time. The first one has been done for you. Try to make sure your hour hand (small hand) is half between the hours. Remember to use a ruler.



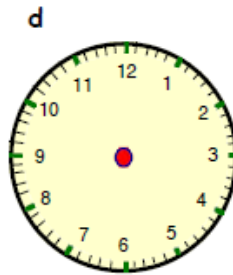
half past four



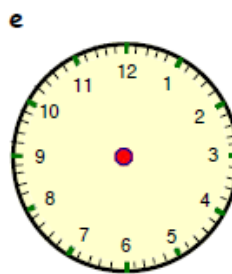
half past seven



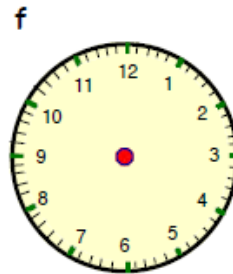
half past two



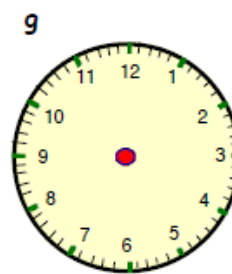
half past three



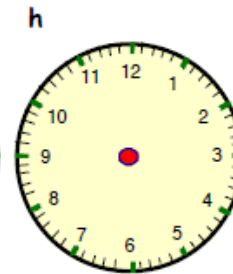
half past eight



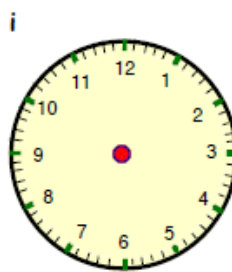
half past ten



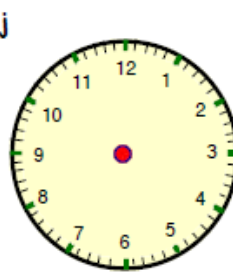
half past nine



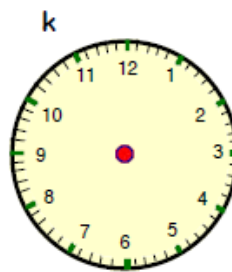
half past one



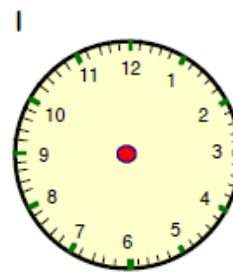
half past eleven



half past five



half past six



half past twelve

5. Now circle the correct time for each clock show.



6 'o clock 4 'o clock
half past 4 half past 3



9 'o clock 12 'o clock
half past 12 half past 9



1 'o clock 11 'o clock
half past 11 half past 12



half past 1 half past 5
1 'o clock 12 'o clock



half past 12 half past 3
3 'o clock 10 'o clock



half past 4 half past 5
6 'o clock 5 'o clock



half past 7 7 'o clock
half past 6 6 'o clock





12 'o clock half past 11
1 'o clock half past 12



half past 12 half past 1
12 'o clock 1 'o clock

Choose Hot or Mild questions- or both- below.



1. Write four thousand and 2 in digits.

2. 689
 $+ 246$

3. 931
 $- 377$

4. I have five sides, five corners and five angles. What shape am I?

5. How much money altogether?



6. I have £10. I spend £8.34.

How much do I have left?

7. What coins might be in this change?

8. $329 + 19 =$

9. $408 - 99 =$

1. Write three hundred and three in digits.

2. 89
 $+ 46$

3. 71
 $- 47$

4. I have six sides, six corners and six angles. What shape am I?

5. How much money altogether?



6. I have £5.00. I spend

£3.09. How much change do I get?

7. What coins might be in this change?

10. I have 27 sharp pencils and 23 blunt pencils. How many do I have altogether?

$$8. 67 + 39 =$$

$$9. 51 - 29 =$$

10. I have 12 sharp pencils and 11 blunt pencils. How many do I have altogether?

HWB:

- We might not be able to do our daily mile but get moving and grooving and keep fit with The Body Coach for Kids:

<https://www.youtube.com/watch?v=d3LPrhI0v-w>

RME:

Our RME Lesson for the week has been uploaded to the school app. Click on our class to view or you can find it on our school website.

