

P3's Home Learning

Wednesday 3rd February 2021

Note:

I am working in the Hub at school today so no MS Teams today. Looking forward to catching up with you all tomorrow.

Remember to upload your work to SeeSaw or email to Mrs Scott at gwill-scottlynne@glow.ea.glasgow.sch.uk. I am online from 9am -3pm to help.



Literacy:

Reading Book Comprehension

If you have collected your reading book this week from school answer the comprehension questions supplied with it.

Remember to answer in full sentences.

Can you create 3 questions about your book?

If you do not have your reading book and comprehension, complete the following comprehension task. You are more than welcome to do both.

Poetry Comprehension

Read the following poem.

Rap up Warm in Winter

You have to wrap up, you need a scarf, gloves and hat,
You have to rap it up, in winter that's that.

When winter comes round, now you've been told,
You need to wear a coat, when it gets cold.
You need to wrap up, when it is dull.
Wear a thick scarf, made of wool.

You can keep warm, you can do it with ease,
You have to keep warm or you will freeze.

You have to wrap up, you need a scarf, gloves and hat,
You have to rap it up, in winter that's that.

Keep those fingers toasty, it's easy to do,
Find a pair of gloves that are right for you.
They come in many colours, patterned and plain,
Your fingers will thank you, they won't be in pain.



Rap up Warm in Winter

With a coat, scarf and gloves you won't feel the chill.
Without this winter clothing, you might get ill.


You have to wrap up, you need a scarf, gloves and hat,
You have to rap it up, in winter that's that.

Keep your head warm with a decent hat,
Fur-lined or woolly, you can't argue with that.

When icy winds blow your ears turn red,
So keep them under wraps, they'll be warm instead.

Say this rap in winter when you go out,
You'll know how to keep warm, there is no doubt.

You have to wrap up, you need a scarf, gloves and hat,
You have to rap it up, in winter that's that.



Now answer the following questions.

1. Which season is this poem about?

Tick one answer (✓)

summer autumn
winter spring

2. Match up the rhyming words.

freeze that
told ease
hat cold

3. What does the poet say, come in 'different colours, patterned and plain'?

Tick one answer (✓)

hats coats
gloves scarves

4. Find and copy one word which means 'warm'.

5. Fill in the missing word.

Without this winter _____, you might get ill.




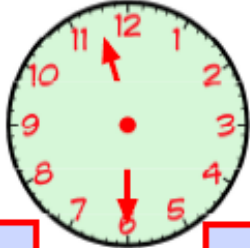
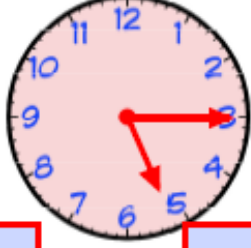
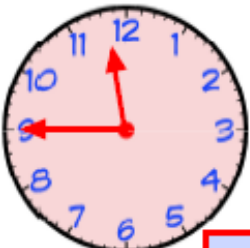
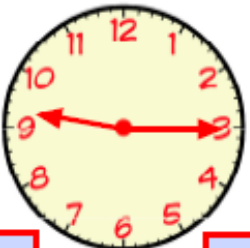
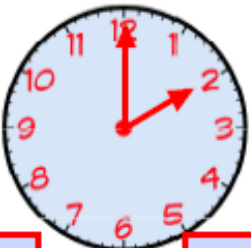
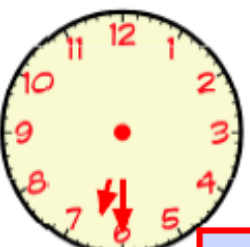
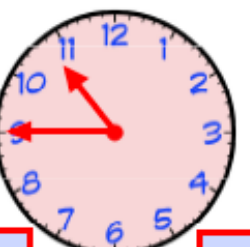
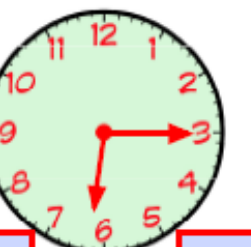


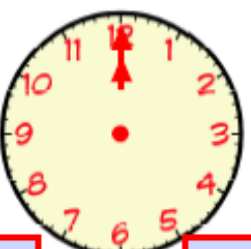

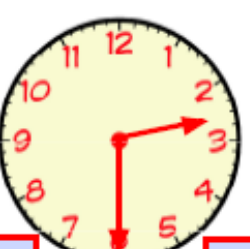
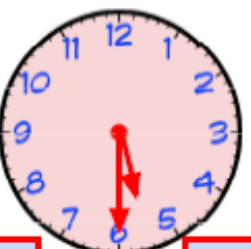
Numeracy: Time: O'clock, Half Past, Quarter Past & Quarter To

To

(Watch/listen to my direct teaching point on SeeSaw and then complete this follow up work or join MS Teams for this lesson)

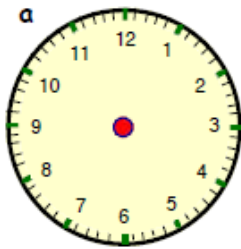
Using our learning from the past few days: o'clock, half-past, quarter past and quarter to:-

1. Write the time for each clock below.

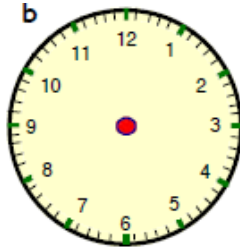
a	b	c
		
<input type="text"/>	<input type="text"/>	<input type="text"/>
d	e	f
		
<input type="text"/>	<input type="text"/>	<input type="text"/>
g	h	i
		
<input type="text"/>	<input type="text"/>	<input type="text"/>
j	k	l
		
<input type="text"/>	<input type="text"/>	<input type="text"/>
m	n	o
		
<input type="text"/>	<input type="text"/>	<input type="text"/>

2. Draw the hands on each clock to show the correct time. The first one has been

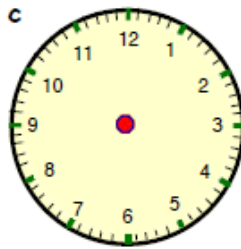
done for you. Remember to use a ruler.



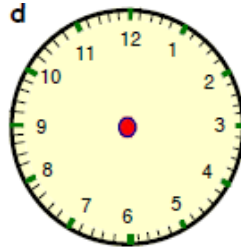
7 o'clock



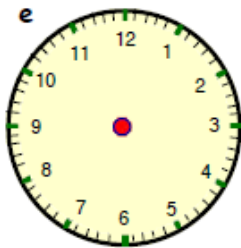
half past 2



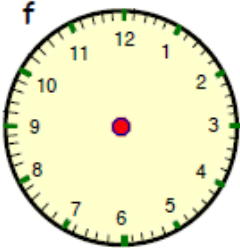
quarter past 5



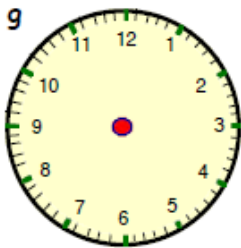
quarter to 4



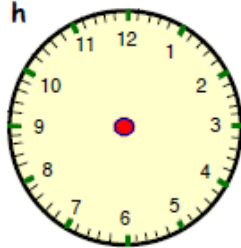
quarter past 1



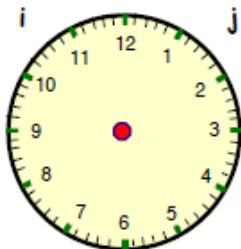
quarter to 6



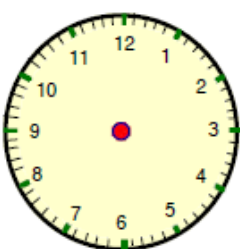
half past 7



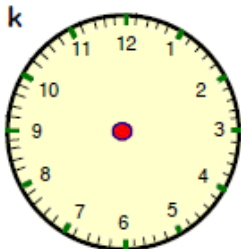
12 o'clock



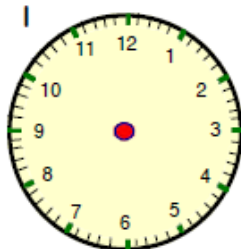
half past 12



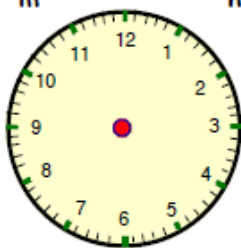
quarter past 9



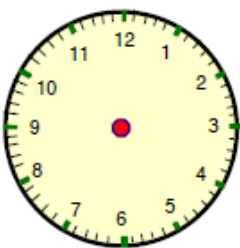
quarter to 3



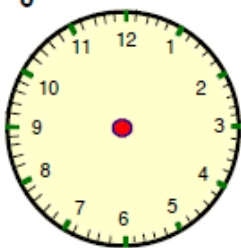
half past 5



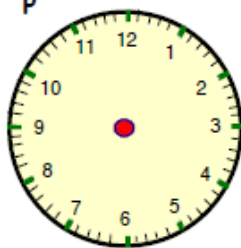
half past 6



quarter past 2



quarter to 9



quarter past 3

3. Match the activities to the approximate times they happen.

Half past 8

10 o'clock

12 o'clock

9 o'clock

Half past 3

Lunchtime

Walk to school

Home time



Playtime

School starts



Mental Maths – Today's Number

Choose Hot or Mild number and answer the questions below.

	
1032	203

- 1) Write the number in word form
- 2) How many tens?
- 3) How many units?
- 4) Write the next 3 numbers
- 5) Write the 3 numbers before
- 6) Next 3 odd numbers?
- 7) Next 3 even numbers?
- 8) Add 10
- 9) Subtract 10
- 10) Round to the nearest 10.

Topic – Scotland

Before we start learning more about Scotland, let's explore your local area of Penilee first. Penilee is an area within the city of Glasgow.



You have probably walked your socks off around your area over this lock down year. If not, go out for a stroll and have a good look around you. Have a think about some of the main features within Penilee e.g. buildings, parks, etc. Now think about what services there are.

Penilee	
Features	Services
Penilee Park	Hillington West Train Station

Tomorrow, we will look at Google Maps and try and locate where these are and explore the area surrounding Penilee.

Using the table you have completed above, can you design a poster to encourage people to come and visit Penilee?

Health & Wellbeing:-

- We might not be able to do our daily mile but get moving and grooving and keep fit with The Body Coach for Kids:

<https://www.youtube.com/watch?v=d3LPrhI0v-w>

