

# P3/4's Home Learning

Tuesday 2nd February 2021

## Literacy:

### Spelling/ Handwriting

Write each of your spelling words  
Using spelling flowers. Draw a flower, write  
the word in the middle and a letter on each  
petal.

Once you have finished, sound out  
each word and have a go at spelling aloud.



## Spelling Flowers

Draw a big flower. Write each of your spelling  
words on one of the petals.

## Word list:

usually, didn't friends, easy, heard, order, red, door, sure, become

## Grammar :

### Similes – Teaching video on Seesaw

A simile is when you compare something or someone using 'like' or 'as'. Follow the link and  
play the simile matching game. Then finish the animal similes,

<https://www.englishclub.com/esl-games/vocabulary/matching-similes-1.htm>

## I am as...



Quick as \_\_\_\_\_

Slow as \_\_\_\_\_

Small as \_\_\_\_\_

Large as \_\_\_\_\_



Sad as \_\_\_\_\_

Happy as \_\_\_\_\_

Nice as \_\_\_\_\_

Mean as \_\_\_\_\_



Cold as \_\_\_\_\_

Hot as \_\_\_\_\_





Loud as \_\_\_\_\_



Quiet as \_\_\_\_\_

Tough as \_\_\_\_\_

Gentle as \_\_\_\_\_




Brave as \_\_\_\_\_



Shy as \_\_\_\_\_

Tame as \_\_\_\_\_

Wild as \_\_\_\_\_



Lazy as \_\_\_\_\_



Busy as \_\_\_\_\_

Put it all together, and you've got me!

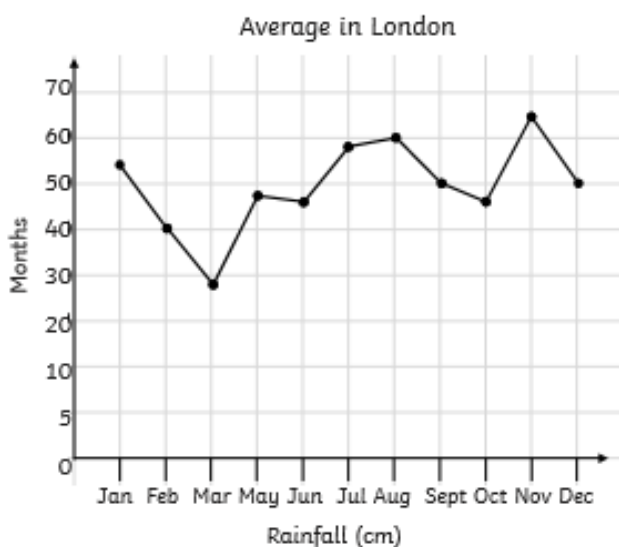
## Numeracy: Line graph – Teaching video on Seesaw

Play the line graph game and then answer the challenge cards.

<https://kids.classroomsecrets.co.uk/resource/year-4-line-graphs-game/>

### Maths Mastery - Statistics - Line Graphs

1. Explain the mistakes in this line graph showing average rainfall in London, which is drawn from the information in the table.

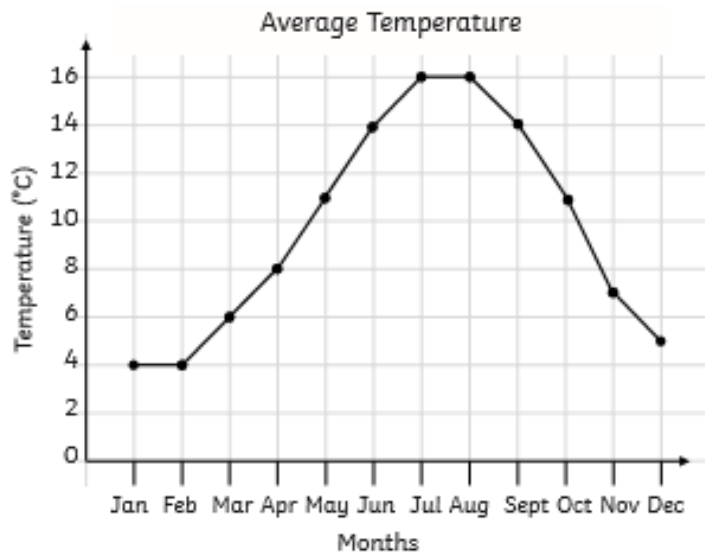


Month	Rainfall (mm)
January	54
February	40
March	28
April	38
May	48
June	46
July	58
August	60
September	50
October	57
November	65
December	50

Maths Mastery - Statistics - Line Graphs

2. Explain why each of the following statements are true or false.

- The lowest temperature is  $5^{\circ}\text{C}$
- The difference between the highest and lowest temperature is  $12^{\circ}\text{C}$ .
- The temperature rose  $11^{\circ}\text{C}$  from March to May.
- The largest fall in temperature was from October to November.

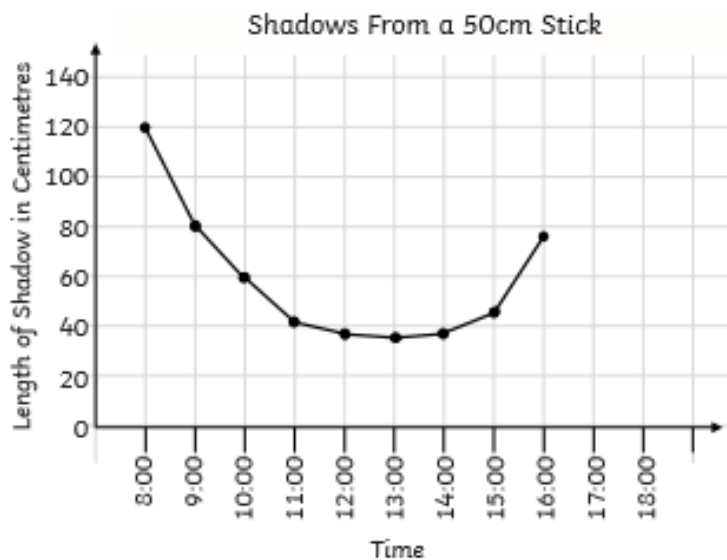


twinkl.com

Maths Mastery - Statistics - Line Graphs

3. This graph shows the length of a shadow at each hour:

- When was the shadow shortest?
- What was the difference between the shortest and longest shadow?
- By how much did the shadow change between 8:00am and 10:00am?
- What time would you expect the shadow to be 120cm again?



twinkl.com

Numeracy Ninja – This is on a separate document and it is some extra maths questions, complete 20 questions each day (day 7).

## Health and Wellbeing:

Cosmic Yoga!

<https://www.youtube.com/watch?v=xlg052EKMtk>

Enjoy doing some calm Frozen craft yoga! You can do this by yourself or ask someone to join you.

## Space Art – Moon and the Sun

Using hot and cold colours, for the sun and moon, create your own piece of art. Use the template or create your own! Here are some examples:





