

P3/4's Home Learning

Friday 22nd January 2021

Literacy:

Spelling/ Handwriting

Tell a story using your words, make sure you underline your words.

Once you have finished, sound out each word and have a go at spelling aloud.

Word list:

hear, stop, without, second, later, miss, idea, enough, eat, face



Tell a Story

Write a story using all of your spelling words.
Make sure you underline your spelling words.

Reading- Listen to the story and answer the questions in sentences.

The Tiddler by Julia Donaldson

Listen to the story using the link, (or read the book if you have it) then complete the tasks. Remember to write in sentences.

<https://www.youtube.com/watch?v=qcTQADUywZY>

1. Why was Tiddler later?
2. Explain Tiddler's dream.
3. What kind of fish would you be and why?
4. What was in the fishing net?
5. What led Tiddler back again?
6. Use 5 adjectives to describe Tiddler.

Complete the extension task.



Sea Creature Fact File

Resource Sheet 1: My Fact File

Complete this fact file for a character or creature from *Tiddler* by Julia Donaldson and Axel Scheffler.

Type of sea creature:

Diet: What does it eat?

.....

.....

.....

Habitat: Where does it live?

.....

.....

.....

Key features: Describe what it looks like.

.....

.....

.....

Picture: Draw or stick a picture here:




Numeracy - Dividing by 4

Play Topmarks - hit the button. Click on the link, press times table and then select the 4 times table. Answer as many questions you can and then try and beat your score. Good luck!


<https://www.topmarks.co.uk/maths-games/hit-the-button>

There are 4 children. How many things will each child have?


Draw the objects in the circles.

8 sandwiches 


\div = each

12 cookies 


\div = each

4 drinks 


\div = each

20 cherries 

\div = each

16 cupcakes 

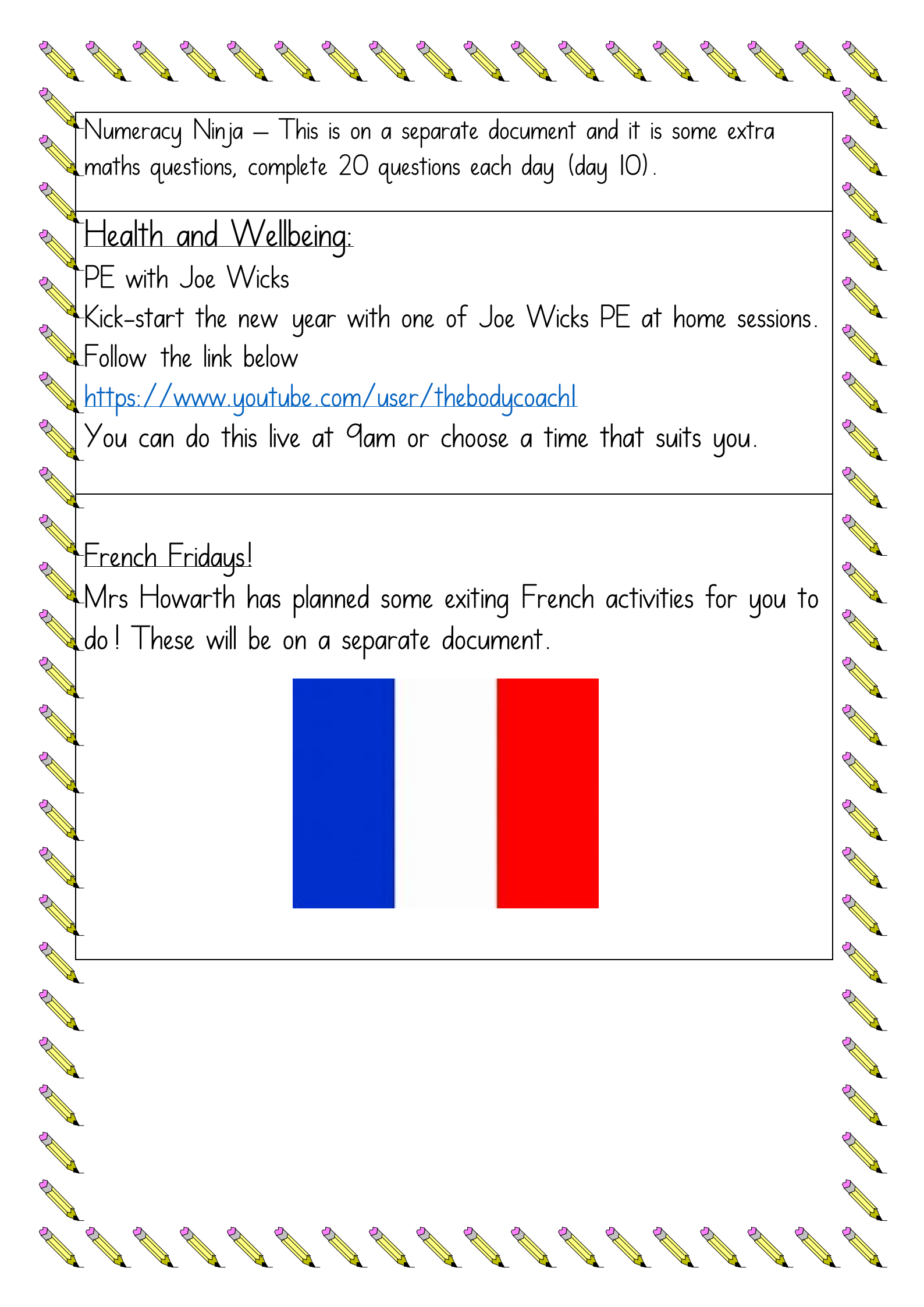
\div = each

8 cheese triangles 

\div = each

Answer the questions

1. $16 \div 4 =$	5. $44 \div 4 =$	9. $28 \div 4 =$	13. $__ \div 4 = 5$
2. $40 \div 4 =$	6. $32 \div 4 =$	10. $36 \div 4 =$	14. $__ \div 4 = 3$
3. $4 \div 4 =$	7. $12 \div 4 =$	11. $8 \div 4 =$	15. $__ \div 4 = 6$
4. $24 \div 4 =$	8. $48 \div 4 =$	12. $__ \div 4 = 3$	16. $__ \div 4 = 2$



Numeracy Ninja – This is on a separate document and it is some extra maths questions, complete 20 questions each day (day 10).

Health and Wellbeing:

PE with Joe Wicks

Kick-start the new year with one of Joe Wicks PE at home sessions.

Follow the link below

<https://www.youtube.com/user/thebodycoach1>

You can do this live at 9am or choose a time that suits you.

French Fridays!

Mrs Howarth has planned some exiting French activities for you to do! These will be on a separate document.

