

# P5b's Home Learning

## Tuesday 9<sup>th</sup> March 2021

Please email me at [gw20naemhumira@glow.ea.glasgow.sch.uk](mailto:gw20naemhumira@glow.ea.glasgow.sch.uk) with any questions that you may have about your tasks. I would love for you to show me evidence of your great learning also!

**WE MISS YOU!**

Name:

Date:

What's something you're grateful for today?

Circle the ones that apply to you:

- I'm feeling awesome
- I'm loving home school
- I'm missing my friends
- I miss my teachers
- I don't like being stuck at home
- I'm feeling lonely
- Sleeping in is the best
- I get bored really easily at home
- I'm struggling to stay motivated
- I finish everything really easily then get bored
- I like the workload because then I get 'me time'

How do you feel today?

- Good
- Great
- Average
- FANTASTIC
- a-OK!
- Meh
- Outstanding
- Bad
- Terrible
- Magical

What is something good about your day?

How are you today my Superstars?  
Complete the daily check in on Seesaw.


Here is the challenge for Day 9:





## Literacy:

D.E.A.R — select a book, magazine, comic or newspaper at home and read for 15 minutes. Why not build a den using pillows and blankets for a cosy read!



Our class is signed up to a reading programme called EPIC.  
This can be downloaded as an app onto an Android or Apple device.  
Or you can even access via [www.getepic.com/students](http://www.getepic.com/students).  
Here is what to do:

1 Tap on "ENTER CLASS CODE"

2 Enter class code

Click on your name and enjoy your read. I have assigned a new fiction book for you this week.

## Boggle:

Choose one Boggle. Will you choose Yellow or Purple today?

Find as many words as you can.

Remember you are only allowed to use letters once unless there are duplicates in the grid.

Spelling Boggle

a	r	l
u	t	o
h	g	h

How many words can you make with these letters?

Spelling Boggle

v	o	e
u	n	r
a	i	s

How many words can you make with these letters?

This is going to be a Chilli Challenge today!

**Mild** = 3- letter words

**Hot** = 4-letter words

**Spicy** = 5-letter words

Who is going to try all the challenges today?

I wonder if any genius will find a word more than 5-letters.

## Spelling

- \* Revise weekly spelling words.
- \* Remember to use SACAWAC when practising your Spelling.  
(Say and Cover and Write and Check your words)

## Spelling Activity:



**Three Times**

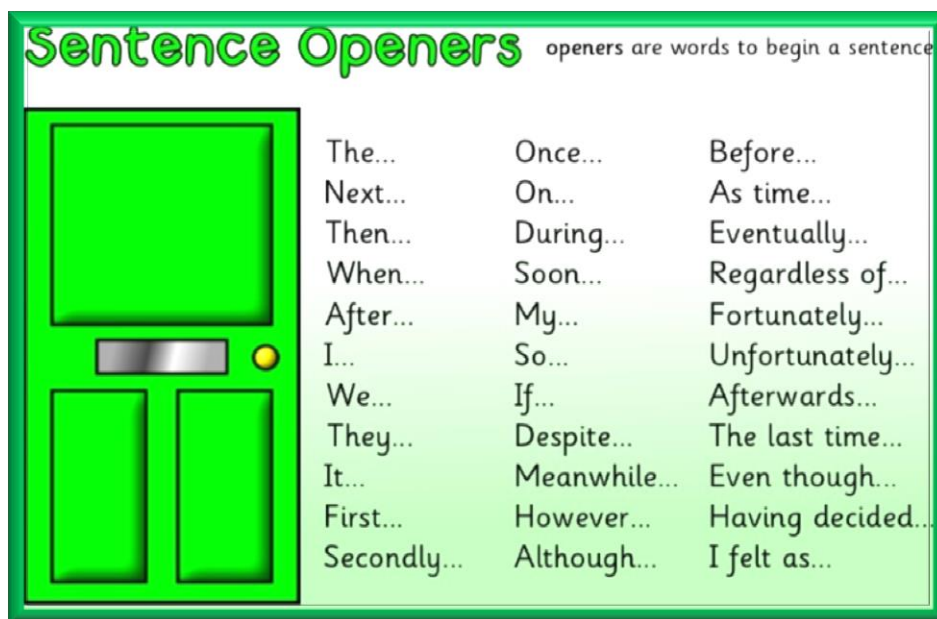
Write each of your spelling words three times using a different coloured crayon or pen each time.

twinkl.co.uk

## Grammar:

LI – I am learning to use sentence openers.

Come and join me in my direct teaching where we will explore openers in detail.



**Sentence Openers** openers are words to begin a sentence

The...	Once...	Before...
Next...	On...	As time...
Then...	During...	Eventually...
When...	Soon...	Regardless of...
After...	My...	Fortunately...
I...	So...	Unfortunately...
We...	If...	Afterwards...
They...	Despite...	The last time...
It...	Meanwhile...	Even though...
First...	However...	Having decided...
Secondly...	Although...	I felt as...

Complete one of the following 'Opener' activities.  
Are you going to choose Challenge 1 or Challenge 2?  
Remember to choose the activity that challenges you. Let's think a bit harder in Literacy today.

## CHALLENGE 1



Here is Challenge 1.

Write three sentences using the different openers.

You could also use other openers but make sure they match the pictures on this worksheet.

I wonder if you can include the adverbs in your sentences.

I cannot wait to see your fantastic work!



LI – I am learning to use sentence openers.

Where?

Inside the huge cabin,  
Beside the scary graveyard,  
Opposite the tall trees,  
Behind the strange figure,  
Under the creaking roof,

Different adverbs,

Suddenly,  
At that moment,  
Nervously,  
Minutes later,  
Foolishly,  
Running quickly,

## CHALLENGE 2

Here is Challenge 2.

Use different openers in paragraphs to describe the pictures in this worksheet. You may also use the openers we have discussed in our PowerPoint.

I wonder if you can include the different adverbs/verbs and adjectives in your sentences.

I cannot wait to see your excellent work!



Verbs/Adjectives

Trembling,

Petrified,

Panicking,

Enraged,



LI: I am learning to use sentence openers.

Where?

Inside the derelict cabin,

Beside the eerie graveyard,

Opposite the crooked trees,

Behind the peculiar figure,

Under the creaking ceiling,

New Paragraph

Moments later,

At precisely 7:30 PM,

As midnight approached,

Different adverbs.

Suddenly,

At that exact moment,

Anxiously,

Charging aggressively,

Please complete this task in your home learning jotter or on paper. **Don't forget to upload your amazing effort!**

## Numeracy:

Let's warm up our mental maths skills by completing this multiplication grid:

×		9	6	
2				8
8	40		48	32
		63		
		27		

L1 – I am learning to answer decimal questions.

Come and join me in my direct teaching where we will explore this learning.

Complete this activity in your home learning jotter, on paper or even on Seesaw if you prefer.

I wonder which challenge you will choose today– Mild, Hot or Spicy?

Remember to choose a challenge that will make you think.

Miss Naeem loves it when you have a growth mindset and give that harder activity a go.



# The Olympics

## Men's 100m Sprint Finishing Times


This table shows the time taken for 12 athletes who took part in a 100m sprint.

Athlete	Time (seconds)
Yohan Blake	10.2
Usain Bolt	10.3
Richard Thompson	11.7
Bruny Surin	11.2
Nesta Carter	12.1
Leroy Burrell	10.6
Mike Rodgers	11.8
Shawn Crawford	11.6
Justin Gatlin	12.7
Linford Christie	11.5
Maurice Greene	12.1
Frank Fredericks	10.9





Questions for **Mild** Challenge:



# The Olympics

## Men's 100m Sprint Finishing Times

Use what you have learned about decimal points to answer the following questions.

1. Who had the fastest time?

\_\_\_\_\_

2. Who had the slowest time?

\_\_\_\_\_

3. Which athletes took longer than 12 seconds?

\_\_\_\_\_

\_\_\_\_\_

4. Which athletes ran faster than Leroy Burrell?

\_\_\_\_\_

5. Whose finishing times are between 11 and 12 seconds?

\_\_\_\_\_

\_\_\_\_\_

\_\_\_\_\_

6. Which athletes were faster than Justin Gatlin, but slower than Richard Thompson?

\_\_\_\_\_

\_\_\_\_\_

7. What time would an athlete need to run to finish 2 seconds faster than Mike Rodgers?

\_\_\_\_\_


8. What time would an athlete need to run to finish 3 seconds slower than Usain Bolt?

\_\_\_\_\_



# The Winter Olympics


## Men's Ski Jump Scores



Athlete	Scores
Robert Johansson	249.7
Daniel Andre Tande	242.3
Andreas Wellinger	259.3
Richard Freitag	240.0
Johann Andre Forfang	250.9
Karl Geiger	236.7
Kamil Stoch	249.3
Markus Eisenbichler	240.2
Ryoyu Kobayashi	240.8
Stefan Hula	248.8



Questions for **Hot** Challenge:



## The Winter Olympics Men's Ski Jump

Use what you have learned about decimal points to answer the following questions.

1. Which athlete had the highest score?

---

2. Which athlete had the lowest score?

---

3. Which athletes were 1st, 2nd and 3rd?

---

4. Which athlete narrowly missed out on a medal?

---

5. What is the difference between Markus Eisenbichler and Ryoyu Kobayashi's score?

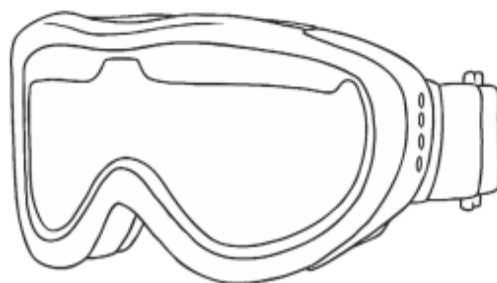
---

6. Which athletes had a score higher than 249?

---

7. What is the difference between Stefan Hula and Ryoyu Kobayashi's score?

---





# The Winter Olympics

## Women's Skeleton Finishing Times

Athlete	Scores
Jacqueline Loelling	51.83
Lizzy Yarnold	51.46
Anna Fernstaedt	52.00
Kimberley Bos	52.01
Tina Hermann	51.86
Kim Meylemans	52.26
Jane Channell	52.09
Lelde Priedulena	52.09
Janine Flock	52.12
Laura Deas	51.91
Elisabeth Vathje	51.82
Sophia Jeong	52.28



Questions for **Spicy** Challenge:



# The Winter Olympics

## Women's Skeleton Finishing Times

Use what you have learned about decimal points to answer the following questions.

1. Which athlete had the fastest time?

---

2. Which athlete had the slowest time?

---

3. Which athletes were 1st, 2nd and 3rd?

---

4. What is the difference in time between 1st place and 12th place?

---

5. What is the difference in time between 1st and 2nd place?

---

6. What is the difference in time between 2nd and 3rd place?

---

7. Which athletes were slower than Jane Channell and Lelde Priedulena?

---

8. Who was faster, Laura Deas or Tina Hermann?

---

9. Who was slower, Janine Flock or Kim Meylemans?

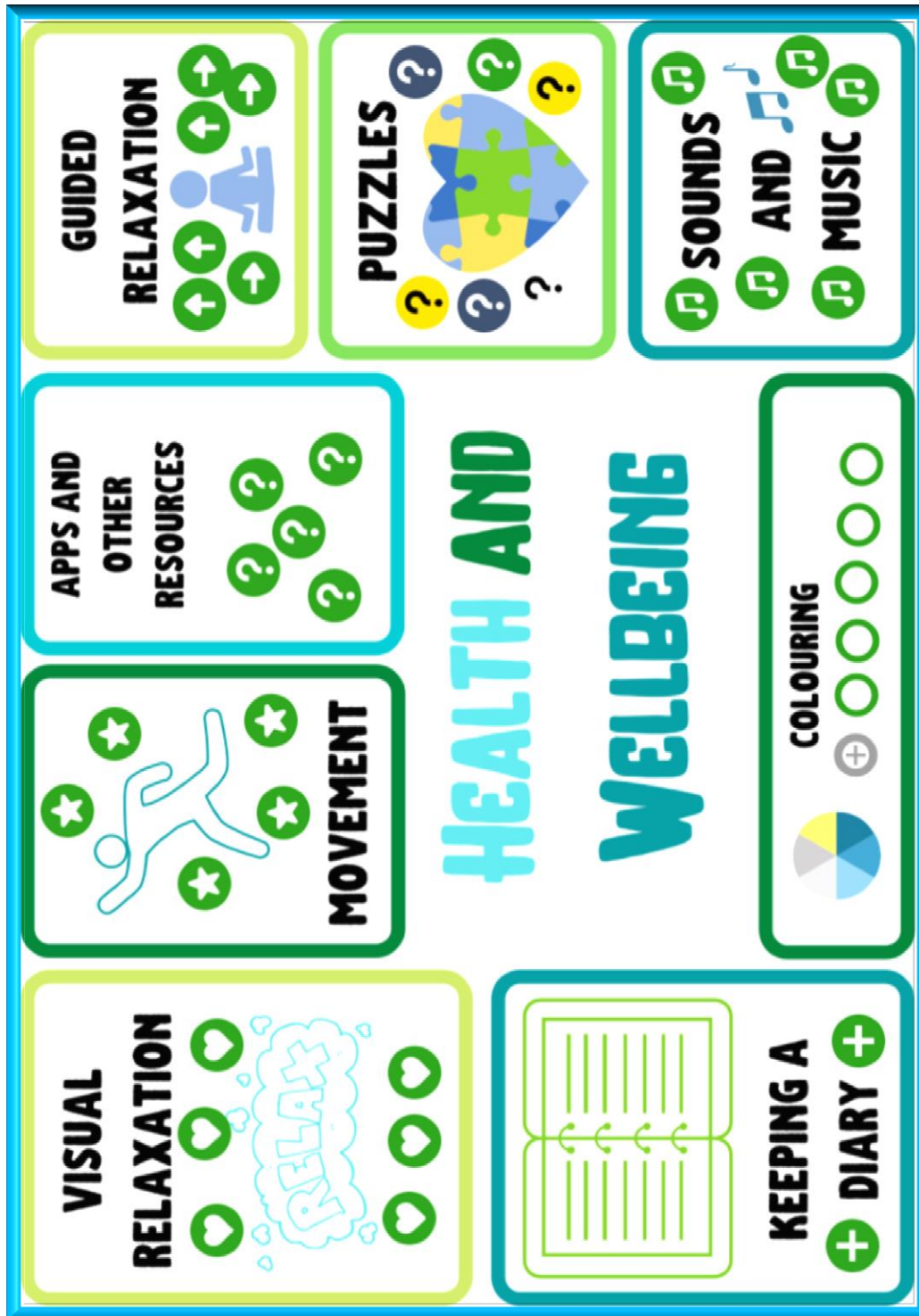
---

## Health and Wellbeing:

Let's choose a different activity each day on Thing Link.

Follow this link: <https://www.thinglink.com/card/1316005438709301250>

Please don't forget to upload your fantastic effort!



Topical Science:

Watch BBC Newsround.



Follow:

[https://www.bbc.co.uk/newsround/news/watch\\_newsround](https://www.bbc.co.uk/newsround/news/watch_newsround)

Can you summarise what is happening in the world today?


Write about your favourite news or can you write 2 paragraphs about what you have learned in Newsround today. I wonder if you will include vocabulary and connectives in your paragraphs. Don't forget to punctuate your amazing sentences!

When you finish, why not send me a voice note of you reading out your favourite news or paragraphs.

**I would LOVE to hear!**



## Visual Art: Choice Board



Pick at least 2 activities from the Visual Art choice board on Seesaw.

Once you have completed your artwork, please don't forget to upload your amazing effort!

**Art Choice Board**

- Draw the view from outside your window.
- Design your own themepark.
- Create your own superhero
- Explore the [Tate Kids](#) website.
- Create a sculpture outside using natural materials.
- Visit [Art For Kids Hub](#) on YouTube and complete 2 drawing activities.

Enjoy!