

P6 Home Learning

Tuesday 2nd February

Morning Starter Activity Grid (20-30 mins)

Choose a different activity each day.

CREATE Glasgow – Choose an activity that interests you.

<https://www.youtube.com/watch?v=Ja5sH75jIwM>

Scratch – Coding. <https://scratch.mit.edu/>

Pobble 365 – Create your own story or complete the tasks connected. <https://www.pobble365.com/>

Animal Cam – Choose an animal, watch the webcam for 20 minutes each morning and write a diary entry to describe what the animal is doing at that time.

<https://www.edinburghzoo.org.uk/webcams/panda-cam/>

National Geographic Kids – Explore this website, find something that interests you and read the information for 20 minutes. <https://www.natgeokids.com/uk/>

Nasa Kids – Explore this website and find something that interests you. <https://www.nasa.gov/kidsclub/index.html> or <https://www.nasa.gov/>

Hit the Button – Multiplication and division game.

<https://www.topmarks.co.uk/maths-games/hit-the-button>

HWB – Jo Wicks



<https://www.youtube.com/channel/UCAxWIXTOiEJoOTYIRfn6rYQ>

Newsround

<https://www.bbc.co.uk/newsround>



Complete the template with today's news highlights.

Literacy – Spelling Game (30 – 45 mins)


<http://www.ictgames.com/mobilePage/lcwc/index.html>

Pick a challenge of your choice. Click on the letters to spell the words.



Explore this website for other games you might enjoy.

Numeracy – Money

Direct teaching video available on Seesaw.

 Find the answer to match each problem.

1	What is half 70 cm?	85 cm	1
2	What is double 19 cm?	5 cm	2
3	How much longer is 1 metre than 95 cm?	70 cm	3
4	How much shorter is 60 cm than 1 metre?	90 cm	4
5	One metre is cut into four equal parts. How long is each part?	38 cm	5
6	One metre is cut into five equal parts. How long is each part?	99 cm	6
7	One length is 10 cm. What will seven lengths be?	80 cm	7
8	One length is 4 cm. What will nine lengths be?	25 cm	8
9	What is the total length of 45 cm and 35 cm?	40 cm	9
10	What is the total length of 15 cm and 75 cm?	35 cm	10
11	What is the difference between 1 metre and 15 cm?	36 cm	11
12	What is the difference between 1 metre and 1 cm?	20 cm	12



24

Sumdog

Complete the challenges I have set.




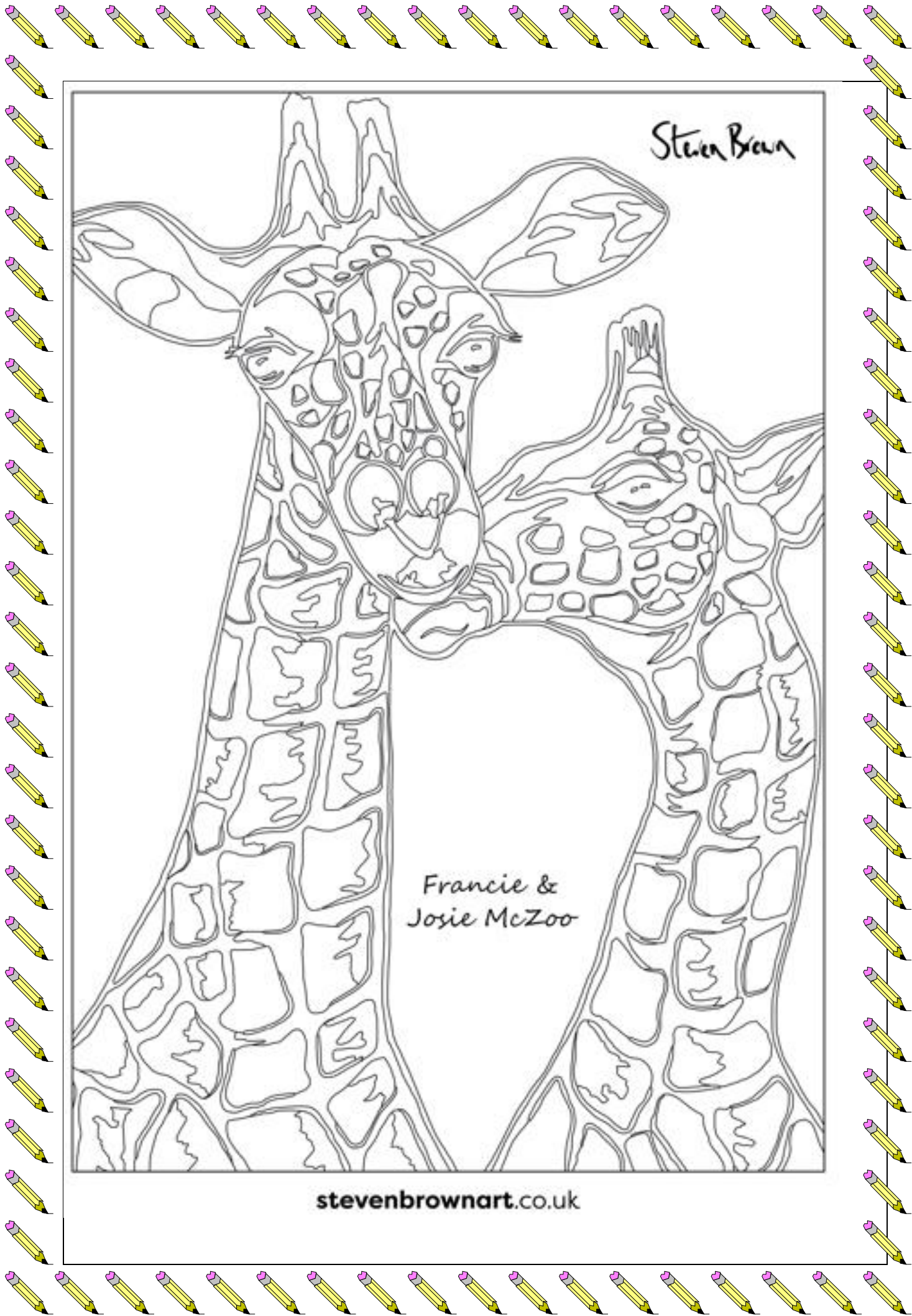
Health and Wellbeing – Mindfulness Colouring

<https://youtu.be/PQjhxTlww-k>

What do you think of Steven Brown's art?



stevenbrownart.co.uk




Steven Brown

Francie &
Josie McZoo

stevenbrownart.co.uk

GEORDIE MCCOO
& THE WEE YIN



Steven Brown

stevenbrownart.co.uk



stevenbrownart.co.uk