

P7 Home Learning

Thursday 11th February

Newsround - Topical Science

<https://www.bbc.co.uk/newsround>

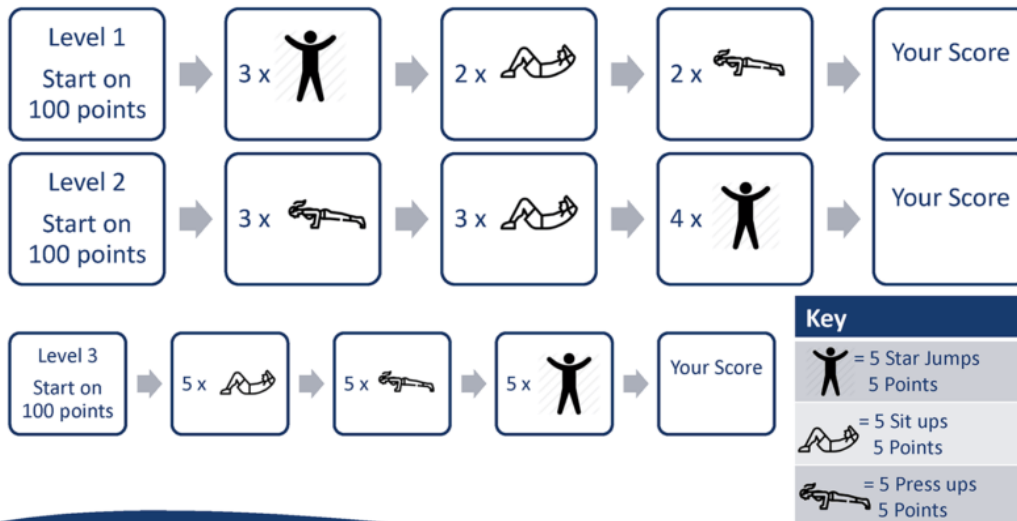


Write 5 sentences about facts you have learned by watching Newsround.

Health and Wellbeing – PE Challenge

Below is a challenge card of different exercises you can do in your house or outdoors. For each activity you gain points, add together your points and tell me your score.

Daily Challenge - PE and Maths #1



PE SCHOLAR

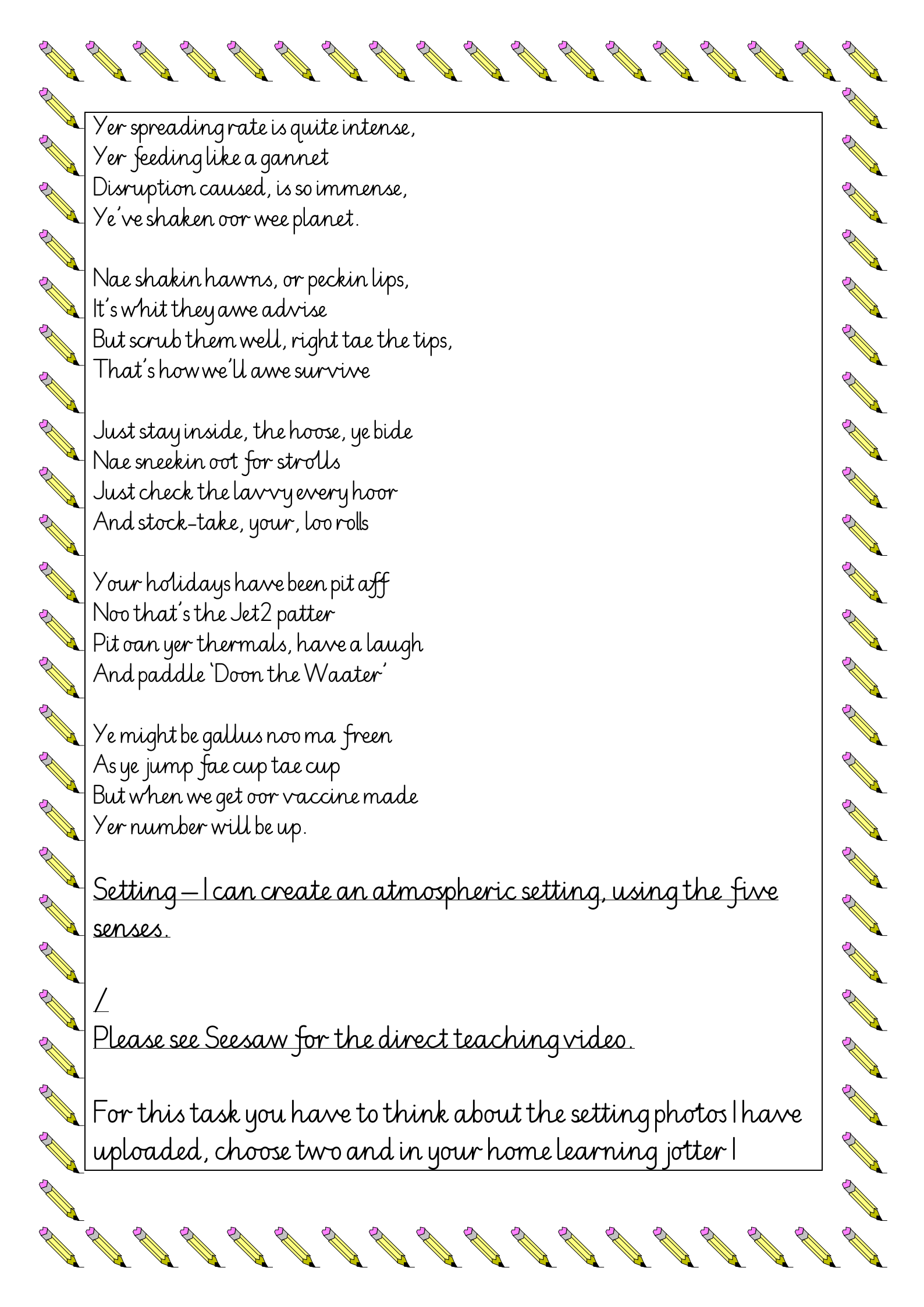
For more home learning resources, visit www.pescholar.com/home-learning

Literacy—

Please continue to read our Scottish poem, Tae a Virus. I would really like it if you could video or voice note yourself reciting it. Remember to use a clear voice, slow pace and expression. There is a voice note on Seesaw of Mrs Beck reading it to you.

Tae A Virus
By Willie Sinclair

Twa months ago, we didna ken,
Yer name or ocht aboot ye
But lots of things have changed since then,
I really must salute ye.



Yer spreading rate is quite intense,
Yer feeding like a gannet
Disruption caused, is so immense,
Ye've shaken oor wee planet.

Nae shakin hawns, or peckin lips,
It's whit they awe advise
But scrub them well, right tae the tips,
That's how we'll awe survive

Just stay inside, the hoose, ye bide
Nae sneekin oot for strolls
Just check the larry every hoor
And stock-take, your, loo rolls

Your holidays have been pit aff
Noo that's the Jet2 patter
Pit oan yer thermals, have a laugh
And paddle 'Doon the Waater'

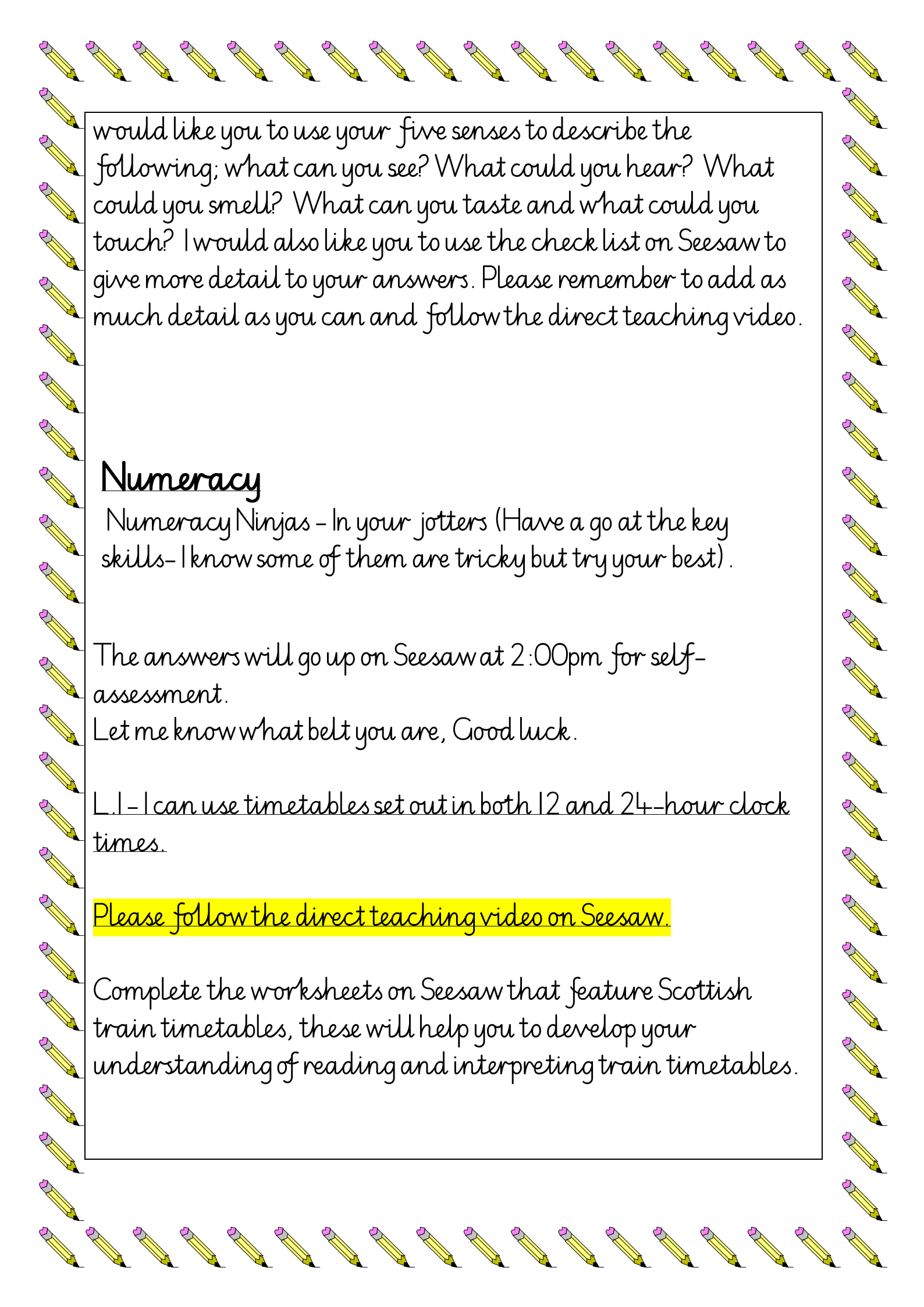
Ye might be gallus noo ma freen
As ye jump fae cup tae cup
But when we get oor vaccine made
Yer number will be up.

Setting – I can create an atmospheric setting, using the five senses.

/

Please see Seesaw for the direct teaching videos.

For this task you have to think about the setting photos I have uploaded, choose two and in your home learning jotter I



would like you to use your five senses to describe the following; what can you see? What could you hear? What could you smell? What can you taste and what could you touch? I would also like you to use the check list on Seesaw to give more detail to your answers. Please remember to add as much detail as you can and follow the direct teaching video.

Numeracy

Numeracy Ninjas - In your jotters (Have a go at the key skills- I know some of them are tricky but try your best).

The answers will go up on Seesaw at 2:00pm for self-assessment.

Let me know what belt you are, Good luck.

L.1- I can use timetables set out in both 12 and 24-hour clock times.

Please follow the direct teaching video on Seesaw.

Complete the worksheets on Seesaw that feature Scottish train timetables, these will help you to develop your understanding of reading and interpreting train timetables.

Cuboids—

Train Timetable Activity

Destination	Journey A	Journey B	Journey C
Dumfries	10:20	11:30	16:40
Glasgow	12:20		18:00
Edinburgh	12:40	13:10	18:30
Perth	13:20	13:55	19:15
Inverness	14:25	14:40	
Duration			3 hours

1. Journey B takes 1 hour to get from Dumfries to Glasgow.
What time do you arrive at Glasgow?

2. Journey C takes a total of 3 hours. What time does it arrive at Inverness?

3. How long does journey A take?

4. You need to be at Perth for 13:30. Which is the best journey to take?

5. You arrive at Edinburgh train station at 18:10.
How long do you have to wait for the next train to Inverness?

6. How many stations does the 11:30 train stop at before it reaches Perth?

Cubes—

Train Timetable Activity

Destination	Journey A	Journey B	Journey C
Dumfries	10:15	11:30	16:40
Glasgow	12:15		18:05
Edinburgh	12:40	13:10	18:30
Perth	13:20	13:55	19:15
Inverness	14:05	14:35	
Duration			3 hours

1. Journey B takes 1 hour 15 minutes to get from Dumfries to Glasgow.
What time do you arrive at Glasgow?


2. Journey C takes a total of 3 hours. What time does it arrive at Inverness?

3. How long do journeys A and B take?

4. You need to be at Perth for 13:30. Which is the best journey to take?

5. You get to Edinburgh at 16:50.
How long do you have to wait for the next train to Inverness?

6. How many stations does the 11:30 train stop at before it reaches Perth?



RME – Notable Christians

Please see Mrs Wallis's plans for RME on the school app.

