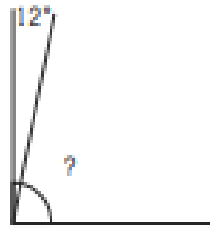


# P5 Complementary angles

## Complementary Angles

Find the missing angles.

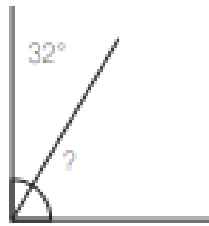
Example:



The missing angle is:

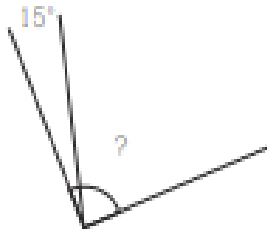
$$90 - 12 = 78^\circ$$

1.



The missing angle is:

2.



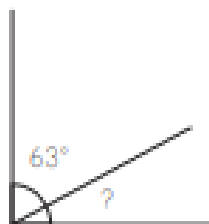
The missing angle is:

3.



The missing angle is:

4.

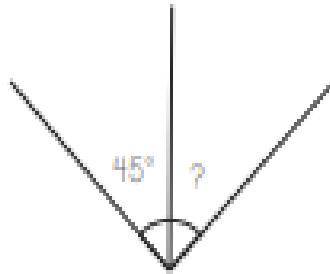


The missing angle is:

# P5 Complementary angles

## Complementary Angles

5.



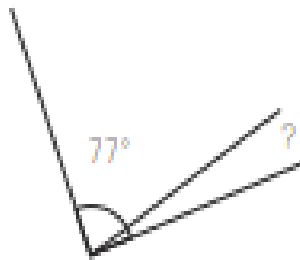
The missing angle is:

6.



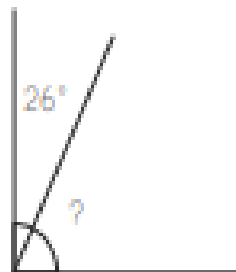
The missing angle is:

7.



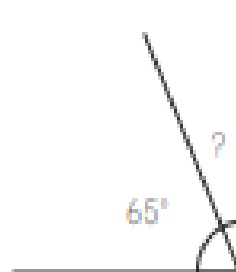
The missing angle is:

8.



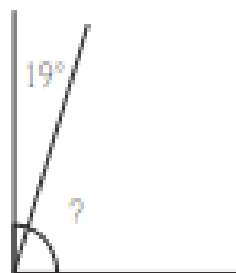
The missing angle is:

9.



The missing angle is:

10.



The missing angle is: